

JPDAVPUBLIC SCHOOL, GANAUR

HOLIDAY'S HOMEWORK – 2019-20

CLASS: IV

HINDI

गर्मी की छुट्टियों में परिवार के साथ समय बिताएं, अपनी दादी या नानी से कहानियाँ सुने जो आपको जीवन भर मीठी यादों के रूप में याद रहेंगे, खूब पानी पिएं, छुट्टियों में अपनी लिखावट सुधारें और समय का सदुपयोग करें।

* सभी कार्य A4 पेपर पर करें।

(1) इन गर्मी की छुट्टियों में एक कहानी की किताब (जैसे पंचतंत्र या हितोपदेश आदि) खरीदें और उसे पढ़ें व प्रतिदिन एक छोटी कहानी को अपनी कल्पना के आधार पर लिखें।

(2) घर पर एक पौधा लगाएँ व उसे आप अपना नाम दें। उस पौधे में होने वाले परिवर्तन को प्रतिदिन लिखें।

(3) प्रतिदिन पाँच श्रुतलेख लिखें

(4) प्रतिदिन हिंदी पाठ्य पुस्तक को पढ़ने का अभ्यास कीजिए।

(5) पुस्तक तथा पुस्तिका में करवाया गया कार्य याद कीजिए।

MATHS

1. Learn tables from 2 to 20 and practice dodging tables twice a week.


2. Do practice of (Ch- Numbers upto 999999; Addition and Subtraction; multiplication)

3. The following table shows number of animals in different wildlife sanctuaries of India.

- a) Jim Corbett national park 4,28,749
- b) Ranthambore national park 1,28,245
- c) Bandipur national park 52,970
- d) Sariska national park 87,384
- e) Gir national park 2,59,426

With the help of above information answer the following questions.

- i) Write number names of the number of animals.
 - ii) Arrange them in ascending and descending order.
 - iii) Write them in expanded form in 3 ways.
 - iv) Find the difference between number of animals in Jim Corbett national park and Bandipur national park.
 - v) Find the sum of animals in Gir national park and Sariska national park.
 - vi) If one ticket of Jim Corbett national park is Rs.895. Find the cost of 127 tickets.
4. Nature is beautiful gift of god. Make a scenery on A3 size sheet using mathematical shapes.
5. Mathematics challenge-
- a) I have some money, If half of it is 13 rupees less than 40 rupees, how much money do I have?
 - b) Rishi has twice the amount of money Apoorva has, but 5 rupees less than half as much money as Subodh has. If Apoorva has 50 rupees, how much money do Rishi and Subodh have?
6. Tangram is a traditional Chinese puzzle made of a square divided into seven pieces (one parallelogram, one square and five triangles) that can be arranged to make objects. Make any two animals on A3 size sheet using tangrams



NOTE- Do the above homework on A4 size sheet and file together.

SCIENCE

1. Take some playing dough (clay) and a few peeled peanuts. Roll the clay into the shape of jaw and place the peanuts the way your teeth are arranged in your jaws. Do not forget to give proper shape to the peanuts.
2. Use dried flowers and leaves to make greeting cards.
3. Prepare a chart showing:-
 - a) Terrestrial Plants.
 - b) Aquatic Plants.
4. Revise the full syllabus done in class(Ch- 1, 2, 3)

SOCIAL SCIENCE

- Make any useful material with the help of waste material.(like pen stand, Folder etc.)
 - Prepare a “ family Photo Album”
 - Fill pg no. 26,33,41,43,50,59,61 in your book.
 - Collect or draw the pictures of different types of bridges.
 - Make a compass or cardinal directions.
 - Paste leisure time activities.
 - Fill and Paste India Political map in scrab book with different colours.
(All work should be done in a separate scrap book)
- Revise Ch- 1 to 3

GENERAL KNOWLEDGE

Q.1 Write down the name of the following ministers of India:

1. President:
2. Prime Minister:
3. Finance Minister:
4. Foreign Minister:
5. Textile Ministry:

Q.2 Solve the following reasoning:

1. 9, 18, 27, 36, __, __
2. 11, 22, 33, 44, __, __
3. 1, 3, 7, 13, __, __
4. 15, 16, 19, 27, __, __
5. 35, 30, 25, 20, __, __

Q.3 What will be next:

1. ABA, ACA, ADA, __, __
2. FGRA, HGRA, JGRA, __, __
3. XASD, ASDX, SDXA, __, __

Q.4 Guess the states and union territories of India:

1. It is famous for its backwaters, greenery and coconut trees. It has a high percentage of literacy.
2. The state is well known for its dance form, natural beauty and festivals. Its capital is Imphal.
3. This state is frequented by tourists for its wonderful beaches and magnificent churches.
4. The capital of this state is commercially very important for the country. It houses the Hindi film industry and is a gateway to India

Q.5 Tick the correct option and fill in the blanks to complete the sentences:

1. The city of Joy is _____.
(a) Aurangabad (b) Mysore (c) Kolkata
2. City is known for its intricate Chikankari work
(a) Lucknow (b) Varanasi (c) Cuttack
3. If you wish to take part in the Kite festival during Sankranti, you must be in:-
(a) Maharashtra (b) Gujarat (c) Karnataka
4. Tourist throng this place to have a ride on the houseboat in the backwaters of:-
(a) Hyderabad (b) Nanital (c) Bihar

Use A4 size sheet or chart paper.

वेद पाठ (V.P)

* अपने परिजनों के साथ सुबह की सैर व व्यायाम कीजिए, घर के छोटे - छोटे कामों में हाथ बटाइए, बड़ों का सम्मान कीजिए और अपने छोटों से प्यार कीजिए।

- (1) ॐ का सुन्दर -सा चित्र बनाकर उसमें रंग भरिए।
- (2) आर्य समाज के चार नियम लिखिए।
- (3) एक भजन या प्रार्थना को सुंदर लेख में लिखिए।
- (4) कक्षा में करवाया गया कार्य याद कीजिए।

DRAWING

1. Complete your book upto Pg-15.
2. Make a beautiful wall hanging.
3. Make any one clay object of your choice.

COMPUTER

Identify various Components of a Computer system as Input/Output devices, Memory

Paste Pictures of Input and Output Devices in Scrap Book.

Complete Ch.1 with assessment Activity in your book

ENGLISH

(DO ALL THE WORK IN ENGLISH SCRAP BOOK)

ENG R. --(1) Choose any 25 difficult words from Unit 1 and make sentence

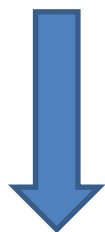
(2) Paste any 10 pics of Collective Noun with their names

(3) Paste any 5 pics of sports personality and write 5 lines on any one of them

(4) Read any one story book of your choice. Write what have you learnt from that story? Write its name also


(5) Revise the syllabus done in the class

(6) converse in English with your parents and read newspaper daily



ENGLISH

For Class : 4th



NAME : _____
(IN BLOCK LETTERS)

CLASS : _____ SECTION : _____

SCHOOL : _____

DATE : _____

DURATION : 1 HOUR

MAXIMUM MARKS : 100

Write the feminine GENDER of the following:

(20 Marks)

1. dog _____
2. hero _____
3. tiger _____
4. poet _____
5. actor _____
6. bachelor _____
7. host _____
8. gander _____
9. fox _____
10. father-in-law _____

Match the following . First one has been done for you as an example:

(20 Marks)

- | | |
|--------------|------------|
| 1. Shoal | a) bears |
| 2. Litter | b) lions |
| 3. Flight | c) books |
| 4. Pride | d) fish |
| 5. Bunch | e) puppies |
| 6. Chest | f) eggs |
| 7. Anthology | g) stairs |
| 8. Row | h) poems |
| 9. Clutch | i) grapes |
| 10. Sloth | j) drawers |

Write the following words in their alphabetical order:

(10 Marks)

1. ELEPHANT 2. EAGLE 3. FEATHER 4. EIGHT 5. FEET
- _____

Add 'ous', 'ive', 'y', or 'ful' to form meaningful ADJECTIVES

(10 Marks)

1. BEAUTY _____
2. COURAGE _____
3. ATTRACT _____
4. DANGER _____
5. CARE _____

6. SHADE _____
7. LEAF _____
8. COMMUNICATE _____
9. MARVEL _____
10. SHAME _____

Common N	Proper N	Abstract N	Collective N

Fill the table above with kinds of NOUNS from the following sentences

(15 Marks)

1. Radhika is my best friend.
2. The visitors were impressed by the beauty of the Taj Mahal in Agra.
3. Mrs. Khanna lost her bunch of keys while going to Market.
4. The Indians are poor victims of corruption.
5. Rahul gave me a beautiful bouquet.

Fill in the blanks with appropriate PRONOUNS:

(10 Marks)

[I, me, you, we, us, they, them, it, mine, hers, he, she, her]

1. This is my brother _____ is in class 6th . He has a pet named , Tommy. _____ is a beautiful pup. _____ loves _____ very much. His mother doesn't like dogs. _____ says that _____ create mess all around.
2. Radhika, Kriti and I are good friends _____ are in the same school. Our maths teacher likes _____ very much. _____ is also the head of maths department. All children like _____.

Trees

Trees provide cool and refreshing shade to all of us. They give us fruit to eat and firewood to burn. All the pieces of furniture and woodwork that we use in our houses, offices, factories and schools are prepared from the wood of the trees. Trees not only supply us with many of the conveniences of our daily life; they do much more than that. They support the life of living things. They help to replace the oxygen that gets used up when living things breathe. We know that if our oxygen supply is stopped, we will not be able to live for long. The oxygen in the air is constantly being used up and turned into carbon dioxide when animals breathe and things burn. The green leaves of trees, in fact of all plants, absorb the carbon dioxide from the air, and with the help of sunlight break it up into carbon and oxygen: and the carbon is used to make starch and the oxygen is released into the atmosphere. That is how trees help to replace the oxygen in the atmosphere, which is constantly being used up.

Answer the following questions on the basis on your reading of the passage:

1. How are trees useful for schools?

(2 marks)

2. How do the trees support life of living beings?

(2 marks)

3. What is the result of burning?

(2 marks)

4. How do trees help in replacing the oxygen in the atmosphere?

(3 marks)

5. What would happen to us if the supply of oxygen is stopped?

(2 marks)

6. The word 'replace' has 're' as prefix to the word 'place'. Write two such words.

(2 marks)

7. Give one use of carbon.

(2 marks)
