


JPDAY PUBLIC SCHOOL, GANAUR
HOLIDAYS' HOMEWORK (21-22)
CLASS-VII (ENGLISH)

INSTRUCTIONS:

- Do your homework neatly in separate small notebook.
- Give yourself  badge on completing every task given by the teacher.
- At the end of the holidays, count your badges and share with your subject teacher.

☐ Fun with letters: Activity

Unjumble the following letters so that they can make some values:

- a) Dirtoaona - _____
- b) Nlemsacs - _____
- c) Shicttay - _____
- d) Mintecmotm - _____
- e) Seinvsiecdes - _____
- f) Pytmaeh - _____

- ☐ Write down a biography on Ruskin Bond with his full name, birth, birth place, collection of books, famous books and awards.
- ☐ Make a chart on Parts of Speech given as below with example:
Parts of Speech:
Noun, Pronoun, Adjective, Verb, Adverb, Preposition, Conjunction and Interjection.
- ☐ Write down one recipe of your favourite food item with instructions, drawing and its process.
- ☐ Learn full syllabus done in the month of April and May. There will be an assignment after the holidays
In the month of July.

Have fun!
Enjoy your holidays!
Stay safe!
Stay tuned with studies!



ग्रीष्मावकाश कार्य (2021-22)

कक्षा- सातवीं

विषय-हिन्दी

* 'बारहमासा' कविता में प्रत्येक माह में मनाए जाने वाले त्योहार का नाम (ऋतु चक्र का वर्णन) चक्र का सुंदर चित्र बनाकर उसमें कीजिए।

* 'वृक्ष बचाओ' एवं 'जल संरक्षण' विषय पर आकर्षक पोस्टर बनाइए। (पाठ-5 राजू का सपना पर आधारित)

* अपने ग्रीष्मावकाश में सभी विषयों का कार्य करने की समय-तालिका बनाइए। (पाठ-6 समय पर आधारित)

* अनुच्छेद लेखन:-

(क) कोरोना संक्रमण

(ख) विज्ञान की दुनिया

(ग) अनुशासन का महत्व

कार्य प्रपत्र

प्रश्न-1 पर, परा, अनु, अव उपसर्गों का प्रयोग करते हुए दो-दो शब्द लिखिए।

प्रश्न-2 शरीर के अंगों से संबंधित 5 मुहावरे लिखिए।

प्रश्न-3 पिकनिक पर जाने हेतु प्राचार्य से अनुमति माँगते हुए पत्र लिखिए।

प्रश्न-4 संज्ञा के भेद एवं उदाहरणों पर एक परियोजना कार्य तैयार कीजिए। (A4 शीट)

प्रश्न-5 अनुस्वार एवं अनुनासिक के चार चार शब्द लिखिए।

प्रश्न-6 'परिश्रम करना' भाव को प्रकट करने वाले 4 मुहावरों के अर्थ व वाक्य लिखिए।



कार्य प्रपत्र

प्रश्न-1 पर, परा, अनु, अव उपसर्गों का प्रयोग करते हुए दो-दो शब्द लिखिए।

प्रश्न-2 शरीर के अंगों से संबंधित 5 मुहावरे लिखिए।

प्रश्न-3 पिकनिक पर जाने हेतु प्राचार्य से अनुमति माँगते हुए पत्र लिखिए।

प्रश्न-4 संज्ञा के भेद एवं उदाहरणों पर एक परियोजना कार्य तैयार कीजिए। (A4 शीट)

प्रश्न-5 अनुस्वार एवं अनुनासिक के चार चार शब्द लिखिए।

प्रश्न-6 'परिश्रम करना' भाव को प्रकट करने वाले 4 मुहावरों के अर्थ व वाक्य लिखिए।

प्रश्न-7 संयुक्त व्यंजन के प्रयोग से बने 5 शब्द लिखिए।

प्रश्न-8 मधुर, शत्रु, बच्चा, मूर्ख शब्दों से भाववाचक संज्ञा बनाइए।

प्रश्न-9 क्रिकेट मैच देखते हुए गौरव और निखिल के बीच हुए संवाद को लगभग 50 शब्दों में लिखिए।

2 / 3

प्रश्न-10 राकेश, अंकुश, अशोक, दिनेश, बलजीत, बालकिशन, मोहन, मनमोहन, ईश्वर इन शब्दों को शब्दकोश के क्रम से लिखिए।

* ज्ञान सागर एवं अभ्यास सागर के (पाठ 1-5) की पुनरावृत्ति कीजिए।

नोट:-

अनुच्छेद लेखन एवं कार्य प्रपत्र हिन्दी उत्तरपुस्तिका में कीजिए।

प्रश्न-10 राकेश,अंकुश,अशोक,दिनेश,बलजीत,बालकिशन,मोहन,
मनमोहन,ईश्वर इन शब्दों को शब्दकोश के क्रम से लिखिए।

* ज्ञान सागर एवं अभ्यास सागर के (पाठ 1-5) की पुनरावृत्ति
कीजिए।

नोट:-

अनुच्छेद लेखन एवं कार्य प्रपत्र हिन्दी उत्तरपुस्तिका में कीजिए।

HOLIDAY HOMEWORK
JPDAV PUBLIC SCHOOL
GANAUR
CLASS -VII
SUBJECT - MATHEMATICS

All the questions based on unit 13 and 14 take help from these chapters

1. WHAT IS SYMMETRY, EXPLAIN IT IN ONE PARAGRAPH.
2. DRAW TWO INK DOT PICTURES. (take a piece of paper and drop some liquid colour or ink on it and fold it once, then open it and see the symmetry)
AND TWO PAPER CUTTING WITH SYMMETRICAL DESIGN.
3. Examining logos
Look for logos on food products, cars stores, magazines and so on. Find at least three logos having line symmetry, sketch them.
4. Make a net of these solid figures, you can use cardboard for this and fold it.
(A) Cube
(B) Tetrahedron
5. Make a chart (A4 sheet paper) of 2-dimensional figures and their corresponding 3-dimensional figures.
(hint- squares makes cube, rectangle makes cuboid).

ग्रीष्मावकाश कार्य (2021-22)

कक्षा- सप्तमी

विषय - संस्कृत

माँखिक कार्य

अप्रैल व मई में करवाया गया संपूर्ण कार्य याद करो । शब्द रूप व धातुरूप अवश्य ही याद करने हैं ।

लिखित कार्य

1. अपनी संस्कृत की पाठ्य पुस्तक में पेज नम्बर-
9,10,11,17,18,19,20,25,26,27,28,35,36,44,45,52,53,54,
59,60,61,69,70,71,77,78,84,85,86,87,88,89,90 (यह पेज
अपनी पाठ्य पुस्तक में ही करने हैं)
2. शब्दरूपाणि – राम , लता ,फल, अस्मद्, तत्, किम्, (त्रिषु
लिङ्गेषु)
3. धातुरूपाणि – परस्मैपदिनः - भू, गम्, पठ्, हस् (चतुर्षु लकारेषु)
अस् (लट्-लृट् लकारयोः)

नोट:- (शब्दरूपाणि , धातुरूपाणि अपनी संस्कृत की कापी में ही करने हैं)

क्रियात्मक कार्य

1. एसाइनमेंट शीट पर कोई पाँच अव्यय शब्द चित्र सहित वाक्य में लिखो। (For VII A)

2. क्रियात्मक कार्य

. अधोलिखिततालिकायाम् क्रियापदानि उदाहरणानुसारं चिह्निकुरुत-

ट	च	ल	त	म	ल	पृ	च्छ	सि	च	चि
अ	र	क्ष	त	म्	ह	द्र	अ	प	प	न्त
टि	प	श्य	कु	क्ष	र	क्ष्या	च	श्य	श्य	य
आ	प	ठ	र्व	च	ला	मः	ल	तु	म	ति
सी	ग	पृ	न्ति	अ	पि	ब	त्	ज्ञ	णा	ति
त्	लु	च्छ	आ	त्य	चि	त्य	ले	ह	ष्य	क्री
ह	ग	न्तु	थः	रु	नृ	स	गृ	खि	ए	डा
आ	नी	ट	ल	अ	पा	ल	ले	श	ष्या	मः

एसाइनमेंट शीट पर वर्ग पहेली बना कर उसमें से 10 क्रिया शब्द छाँट कर लिखो। जैसे-- पठन्ति। (For VII B)

1.	6.
2.	7.
3.	8.
4.	9.
5.	10.

HOLIDAYS HOMEWORK (2021-22)

CLASS 7 (SOCIAL SCIENCE)

- LEARN THE SYLLABUS DONE IN THE CLASS.
- PREPARE FLASH CARDS SHOWING THE WILD LIFE SPECIES OF INDIA (FLORA AND FAUNA)
- PREPARE A PROJECT ON 'MAJOR RELIGIONS' AND 'MEDIA -THE MAINSTAY OF DEMOCRACY'.
- COLLECT THE PICTURES AND NAMES OF CHIEF MINISTERS OF EACH STATE AND PASTE IT IN SCRAP FILE.
- PREPARE A POWERPOINT PRESENTATION DEMOCRACY ON DELHI SULTANATE .
- Prepare an advertisement for awareness in citizens for vaccination against COVID-19

- PREPARE AN ALBUM SHOWING LIFE SKETCHES AND PHOTOGRAPHS OF INDIAN WOMEN WHO HAVE EXCELLED IN DIFFERENT FIELDS.

1. What is an environment write its type?
 2. Write down a short note on hydrosphere.
 3. Define atmosphere by giving its importance for human being.
 4. Biosphere is important for mankind. How?
 5. Write down weathering agents by giving stages of rivers.
 6. Differentiate between continental glacier and mountain glaciers by giving example.
 7. What is National Archives and where it is located?
 8. What 2 provisions of constitution given under the Right to equality.
 9. What is Caste System?
 10. The government has launched a number of poverty alleviation programmes .explain any two.
 11. What do you mean by medieval period?
 12. Make an activity of formation of soil.
 13. What are the agent of gradation ?explain.
 14. In which three periods our history divided.
 15. What do you mean by reservation in all field?
 16. What are the special steps are taken for rural and tribal children ?
 17. Define the right to equality.write few measures taken by Government.
-
18. What is preamble and what is its importance?
 19. What is multi-party system and coalition government?
 20. What is universal adult franchise?

Lesson - 1

Nutrition in Plants

Q.1 Match the following :-

	Column 1	Column II	Ans
a)	Plants	i) Saprotrophs	a
b)	Animals	ii) Autotrophs	b
c)	Pitcher Plant	iii) Heterotrophs	c
d)	Fungi	iv) Insectivorous Plant	d
e)	Lichens	v) Symbiotic relationship	e
f)	Cuscuta (Amarbel)	vi) Parasitic Plants	f

Q.2 Neatly label the following diagram.

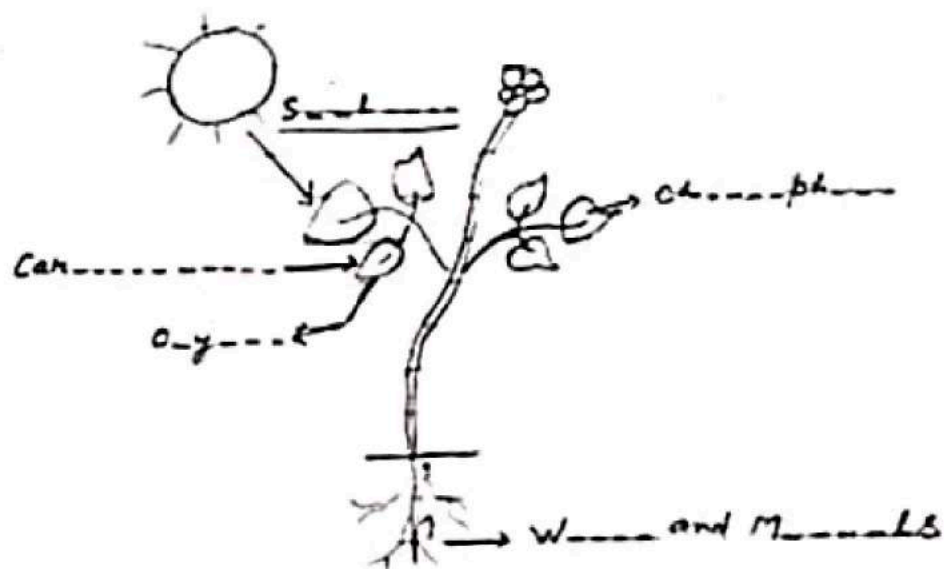




Diagram showing photosynthesis

Q.3 Label the following diagram of stomata.

Q.4 Fill in the blanks



Q.5 Complete the following equation representing photoynthesis.



Worksheet -2

L-2

Nutrition in Animals

Q.1 Fill in the blanks.

- i) The conversion of complex food is called _____.
- ii) A _____ is an association of symbiotic relationship between an alga and a fungus.
- iii) A plant that has both autotrophic as well as heterotrophic mode of nutrition is _____.
- iv) The mode of taking in food by organism and its utilization by the body for its various activities is called _____.
- v) The relationship in which two different organisms live together in such a way that benefit each other in some way is called the _____.

Q2. Correct the following sentences by correcting the highlighted words :

- i) Roots are the main site of photosynthesis in plants.

Ans. _____

- ii) Boiled and cooled water with a pinch of salt and some sugar which is given to the patient suffering from diarrhea is called iodine solution.

Ans. _____

- iii) False feet in amoeba are called vacuoles.

Ans. _____

- iv) Cellulose is digested by ruminants in rumen.

Ans. _____

- v) Green pigment present in leaves is rhizobium.

Ans. _____

Note :- Under lined words should be highlighted.

Q.3 Match the items in Column I with Column II :

Column I		Column II	
a)	Liver	i)	Acid release
b)	Salivary gland	ii)	Storage of undigested food

- c) Small intestine
- d) Large intestine
- e) Rectum
- f) Stomach

- iii) Bile secretion
- iv) Complete digestion
- v) Absorption of water
- vi) Release of faeces

Answer :

a.	
b.	
c.	
d.	
e.	
f.	

Q.4. Complete the table :

Animal	Kind of Food	Mode of Feeding
Snail		
Ant		
Eagle		
Butterfly		
Mosquito		
House Fly		
House Fly		

Help boxes :

Column I

Blood	Sweet	Flesh
Nectar	Blood	
Waste food		

Column II

Siphoning	Chewing
Capturing	Sucking
Sucking	Siphoning

Q.5 Label the following diagrams :



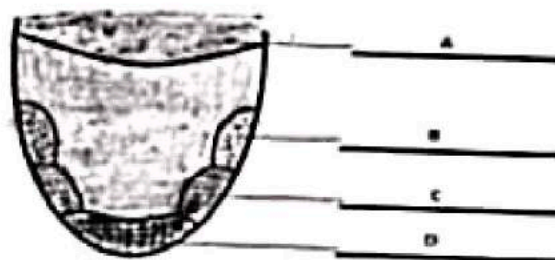
A	
B	
C	
D	
E	
F	
G	

Help Box :

Buccal Cavity	Oesophagus	Large Intestine
Small Intestine	Liver	
Pancreas	Stomach	

6

b)



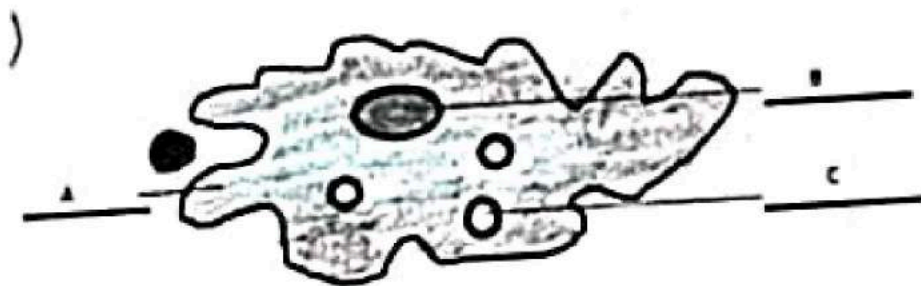
Answers :

A	
B	
C	
D	

Help Box :

	Bitter	Sour
Sweet	Salty	

c)



Answer :

A
B
C

Help Box :

Food Vacuole	
Nucleus	Pseudopodia



L-5 Acids, Bases and Salts

11

Q.1 Fill in the blanks.

- i) An acid tastes s_____
- ii) A base tastes b__ tt_____
- iii) Litmus, a natural indicator is extracted from Li_____.
- iv) An indicator used in a neutralisation reaction is phe____ph_____lein.
- v) Sugar is a n....u.....l substance.

Q.2 Match the following.

- | Column I | Column II |
|---------------|-----------------------------|
| a) An antacid | i) Formic acid |
| b) An Ant | ii) Milk of magnesia |
| c) China Rose | iii) Turns red litmus blue. |
| d) An acid | iv) A natural indicator |
| e) A base | v) Turns blue litmus red. |

Answer :

a.	
b.	
c.	
d.	
e.	

Q.3 Bring a soil sample of your area, find out weather it is acidic, basic or neutral with the help of red or blue litmus solution /paper. Write this observation in the space given below.

Q.4 According to their nature give proper place to each substance given below.

Curd, Common Salt, Vinegar, Soap, Sugar, Lime water, Lemon Juice, Window Cleaner.

1. Acidic Nature

2. Basic Nature

3. Neutral Substances

Q.5 Complete the following table

Ex.	S.No. Name of Substance		Litmus used	Colour change
	1	Curd	Red	No change
	2.	Salt	Blue	
	3.	Lime water	Red	
	4.	Lemon Juice	Blue	
	5.	Window Cleaner	Blue	
	6.	Sugar	Red	
	7.	Vinegar	Blue	
	8.	Baking soda	Blue	

L-13 Motion and Time

Q.1 Here are a few units of time. Arrange them in a ascending order
Second, day, year, month, munutes, hour

..... < < < < <

Q.2 Let us calculate your speed of walking.

Distance Travelled = metres
Time taken = sec.

Speed = $\frac{\text{Distance Travelled}}{\text{Time taken}}$

Speed = $\frac{\text{-----}}{\text{-----}}$ = m/ sec.

(Note - you can do this activity in your school's corridor with the help of your friend)

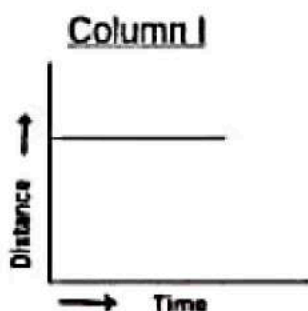
Q.3 A simple pendulum takes 10s to complete 20 oscillations. What is the time period of the pendulum?

No. of oscillations =
Time taken = sec.

Time period of the pendulum = $\frac{\text{Time taken}}{\text{No. of Oscillations}}$

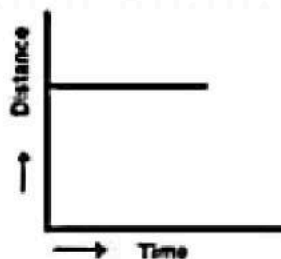
Time period of the pendulum = $\frac{\text{-----}}{\text{-----}}$ = s

Q.4 Match the following

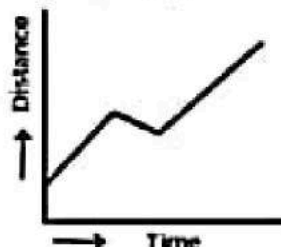


Column II

i) A car moving with a constant speed.



ii) A car parked on a side road



iii) A car moving with a speed changing

Answer :

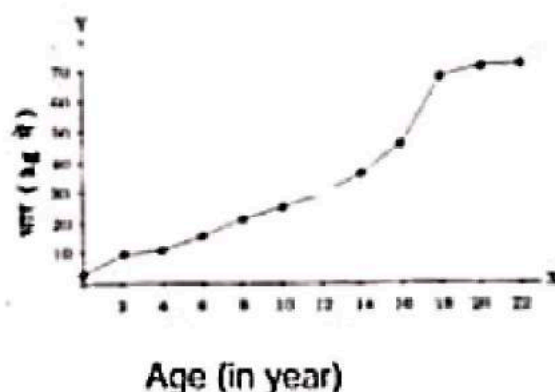
A	
B	
C	

Q.4 a) Observe this bar graph showing runs scored by a team in each over and answer the following questions.

a) No. of runs scored in the 3rd over.

b) No. of runs scored in the 6th over.

Q.5. Observe this line graph showing change in weight of a man with age.



a) Weight at the age of 10 yrs.

b) Weight at the age of 16 yrs.

JP DAV public school Ganaur

Class 7th

Holidays homework of Art and craft

- Make a poster on grow more trees.
- Complete your Phase 1 to 6 in step by step.
- Make anyone craft item with Waste material .