



Nothing is more powerful for your future than being a gatherer of good ideas and information. That's called doing your homework.

Jim Rohn

While doing your homework keep remembering Thomas A. Edison

When he says

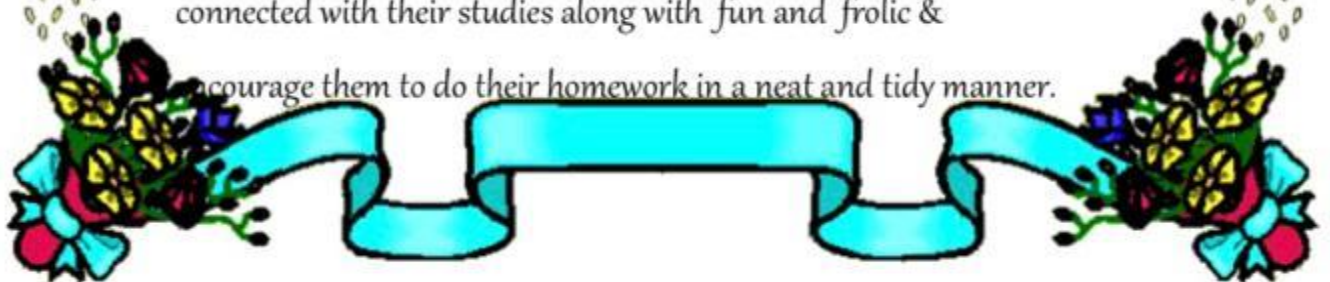
Genius is one percent inspiration and ninety-nine percent perspiration. As a result, a genius is often a talented person who has simply done all of his homework.

Dear parents

We wish you a very happy and fruitful time with your children.

Summer vacation is the most awaited time for the students as they want to play, enjoy and relish with their friends, neighbours and relatives. This is a time for them to stay away from the mundane schedule of daily life. They want to enjoy it in leaps and bounds. But we request you to keep their energy channelised. You should be a part of their enjoyment but time and again a check is required. Now it's your responsibility to make them stay connected with their studies along with fun and frolic &

encourage them to do their homework in a neat and tidy manner.





Here are some of the suggested activities that you can do as a family:

1. Prepare a well being plan for self.
2. Stick to routines or starting new ones.
3. Get up and go to sleep at regular times.
4. Help them explore new hobbies and interest.
5. Read, solve puzzles, play board games, etc.
6. Keep a gratitude journal. Writing down three things you are grateful for every day. Congratulate yourself and others on having a "MEGA DAY".
7. Take out time for Reading, Music, Dance, Singing, Laughing.
8. Set Challenges- Encourage each other to take up new activities and complete them.
9. Be Creative with Space- Find a corner in the house and allow yourself and your children to decorate it.
10. Involve your children in household activities also..
11. Take them for outing to place of their interest & let them explore the world.
12. Communicate with your children and let them know you fully.

As parents you are requested to keep a watchful eye on your children and stop them from engaging in :

1. Excessive use of mobile phones.
2. playing online games
3. spending a lot of time alone away from family members.

Be Safe



NOTE: Take the print out of the following worksheets , complete and paste them in a colourful scrap book.1

SCRAMBLE

An anagram is a word made by using letters of another word in a different order.

Sort out the following anagrams. Look at the example first.

Example : The name of an animal- toga : GOAT

I

1. A place where you sleep - REBODOM
2. A member of a family - RESIST
3. A part of a body - FRINGE
4. The name of an animal - REAB
5. The name of a bird - RAPTOR
6. The name of some fruit - CHEAP
7. The name of some sport - GYRUB
8. The name of the country - PAINS
9. Means of transport - PANEL
10. Something you can open - ODOR

II

1. A place where you cook - THICKEN
2. A member of a family - TUNA
3. A part of a body - ONSE
4. The name of an animal - FLOW
5. The name of a bird - RWOC
6. The name of some fruit - PLEAP
7. The name of some sport - FLOG
8. The name of the country - CHAIN
9. Means of transport - TOREM
10. A noble profession - CHEATER

2.

FRENCH FRIES



Listen to the audio carefully. As you listen, solve the exercise given below :

A. Put a (X) in the right box :

1. The word *chef* means :

a person incharge of a hotel

a person who cooks

a person who waits on people

2. In the audio, *fry* means :

to cook in a pan over heat with use of oil

to cut something into pieces

to slice something

3. The word *twice* means :

one time

two times

three times

4. French fries are made using :

coke

onions

potatoes

5. The strips are soaked in water to remove :

surface starch

worms

oil

6. Good French fries are made with :

no bath technique

one bath technique

two bath technique

7. Thin style French fries have been popularized by :

Fast food chains

China

USA

8. of China's French fries are imported.

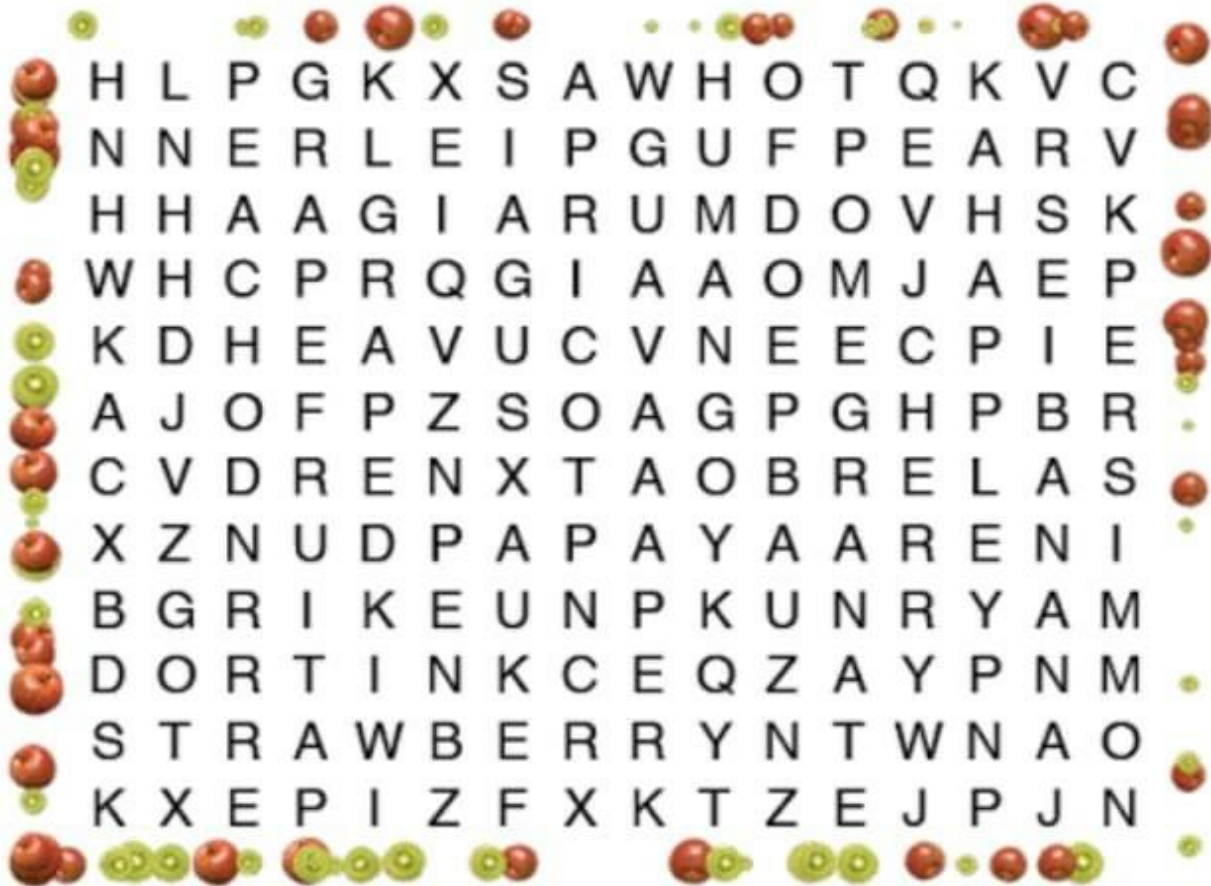
20%

9%

70%

FRUITS

WORD SEARCH



APPLE

APRICOT

BANANA

CHERRY

GRAPE

GRAPEFRUIT

GUAVA

KIWI

MANGO

PAPAYA

PEACH

PEAR

PERSIMMON

POMEGRANATE

STRAWBERRY

Sing any beautiful poem according to your interest in English with action and make a video.

After that check it carefully and send to me. The video should be sent after 30 June.

As you will sing the poem, you will find out some rhyming words. Note down those words and prepare an attractive learning material as shown below. You can choose shapes according to your interest.



HINDI

नोट :- सृजनात्मक कार्यव लिखित कार्य अभ्यास पुस्तिका में ही कीजिए । (मौखिक कार्य)

भाषा माधुरी :- पाठ एक से पाँच भाषा अभ्यास पाठ एक से पाँच याद कीजिए।

(लिखित कार्य)

1. भाषा अभ्यास पेज नंबर:-15 ,25 ,34 ,35 ,43,47,50,55,72 अभ्यास पुस्तिका में भरें।
2. सृजनात्मककार्य:- नदियों को साफ रखने का संदेश देने के लिए कोई दो स्लोगन लिखिए। (अभ्यास पेज न.24)
3. आप अपने बड़ो से ऐसे व्यक्तियों के बारे में पता कीजिए जिन्होंने शारीरिक अक्षमता पर विजय प्राप्त कर दुनिया में नाम रोशन किया है? उनका एक चित्र चिपकाकर उनके बारे में लिखिए।(अभ्यास पेज 69)
प्रतिदिन हिंदी समाचार पत्र पढ़िए। समाचार पत्र में से कुल 20 शब्द छांट कर हिंदी की उत्तर पुस्तिका में लिखिए।
4. कला समेकितगतिविधि:-पेन्सिल की छीलन से ग्लेसपेपर,मछली,अनानास यापोट फलॉवर बनाकर पेन्सिल की छीलन चिपकाएँ। (नोट :-इस गतिविधि के लिए चार्ट या ए फोर साइज शीट का प्रयोग कीजिए ।)

Mathematics

Note : Do all this questions (1 to 15) in separate notebook.

1. Write the period , place , place value and face value of the underlined digit.
(I) 80,47,56,508
(ii) 204,089,369
2. Write the number name for
(1) 258,608,001
(2). 45 ,05 ,23 ,908
3. Find the difference of two sevens in the given numerals
376, 347 ,213
4. Find the LCM of 5 , 12 and 30.
5. Write the multiple of 8 between 32 & 56.
6. Is 45 a multiple of 45?
7. Find the difference between
63, 25,80,741 and. 98,27,05,009
8. Find the sum of the number 765432 and the number obtained by reversing it.
9. Write the period and corresponding place of a 8 digit number.
10. Find the product of the largest number of 4 -digits and the largest number of 3-digits.
11. Fill the following:
a). $4 \times 5 = 20$. : ____ is the ____ of 4 and 5.
b). $2 \times 4 \times 5 = 40$. ∴ 40 is the ____ of 2, 4 and 5.
- Q.12 Subtract 34,56,76,235 from the sum of 45,63,87,405 and 32 ,65,12,231.
- Q.13 write all the prime numbers between 1 and 50.
- Q.14 Find the quotient and remainder. $9978956 \div 99$
- Q.15 The cost of 215 dolls is 456455 . Find the cost of one doll.

MATHS activity

Make a grid of 10×10 and colour all the even numbers with Red and odd numbers with blue.

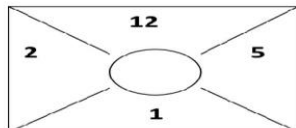
ACTIVITY

OBJECTIVE : To practice the four fundamental operations.

MATERIALS REQUIRED: A-4 size sheet, pencil, scale, sketch pens and colours.

PROCEDURE:

1. Make 5 number cards on a sheet.
2. You can add, subtract, multiply and divide.
3. Use all the four numbers on the card, but use each number only once.
4. The objective is to make 24.
5. Example :



$$\begin{aligned} 12 \div 2 &= 6 \\ 5 - 1 &= 4 \\ 6 \times 4 &= 24 \end{aligned}$$

SCIENCE

- 1) Draw a well labelled diagram of inner view of eye on A4 sheet and write down the functions of each .
- 2) There are many things in the house that have joints. Example door and scissors. Compare the joints of your body with different joints that you see in various appliances in your house. Record your results in the following table.

Name of the joint in our body	Joint in an appliance which is similar
Hinge joint	Hinge of a door
Pivot joint	
Gliding joint	
Ball and socket joint	

- 3) Take some seeds gram and moong Dal, Put them separately in four glass dishes labeled as ABCD and keep them for four to five days under the conditions given below .

Dish A -Keep seeds on moist cotton at room temperature.

Dish B- Keep seeds without water at room temperature.

Dish C- Keep seeds in dish completely filled with water at room temperature.

Dish D- Keep the dish having seeds on moist cotton in an ice box or a refrigerator.

After 4-5 days record your observation of the seeds present in the glass dishes A,B,C and D.

- 4) Make a poster on the environmental issues like ozone layer depletion, pollution, water scarcity on A4 sheet

5) Fill in the blanks

- a) A _____ is an area where the earth is covered mainly by large number of trees.
- b) Forest generally develops in an area where there is annual rainfall of at least _____.
- c) Trees help in checking global warming by absorbing _____.
- d) _____ leaf is known as green gold of Odisha.
- e) _____ and _____ are special product obtained from forest.
- f) The Forest Conservation Act was enacted by the Indian Parliament in _____.
- g) _____ leads to decrease in the levels of ground water in nearby areas.
- h) A _____ is a reserved area in which birds and animals are protected from hunting.
- i) A _____ is an area where the earth is covered mainly by large number of trees.
- j) Forest generally develops in an area where there is annual rainfall of at least _____.
- k) Trees help in checking global warming by absorbing _____.
- l) _____ leaf is known as green gold of Odisha.
- m) _____ and _____ are special product obtained from forest.
- n) The Forest Conservation Act was enacted by the Indian Parliament in _____.
- o) _____ leads to decrease in the levels of ground water in nearby areas.
- p) A _____ is a reserved area in which birds and animals are protected from hunting.

6) Tick the correct options

A. The forest are referred to as earth's lung because

- a) The green plants absorb oxygen and release carbon dioxide in the atmosphere.
- b) The green plants absorb carbon dioxide and release oxygen in the atmosphere.
- c) Maintain the balance between nitrogen and oxygen
- d) None of the above.

B. Deforestation is

- a) Large scale cutting of forest
- b) Large scale usage of forest.
- c) Large scale planting of plants in the forest.
- d) Large scale removal of soil from the forest.

C. Forests develop generally in the area where annual rainfall is at least

D.Forest should not be cut because

- Forest serves as home to many types of animal.
- Forest help to bring good rainfall
- Forest prevent soil erosion
- All the above.

7)Learn Lesson 1,2and 3For periodic test 1(july)

SOCIAL SCIENCE

***Make 2 family frames and paste pictures as indicated**

- A few years ago you were a baby.
- When you are 10 years old child now.

***Make a greeting card for your grandparents by pasting some pictures.**

***Make a poster on different types of Migration.**

***Paste 6 Political map of India in Scrab book and write downn questions of map skill of chapter -2,3,5 and find out it's answers also.**

*Revise Ch-1,2

ग्रीष्मावकाश हेतु संस्कृत कार्य

- पाठ - 1,2 मम परिचय: और स्वदिनचर्या याद करें ।
- कारक की परिभाषा,कारक चिह्न याद करें और A4 शीट पर रचनात्मक रूप में वाक्य के साथ दर्शाएँ। (Roll No. 1-20 ,Section-A,B)
- पाठ्यपुस्तक सुरभि: पेज नंबर 66 से अंगों के नाम उत्तर पुस्तिका में लिखें और A4 शीट पर भी चित्र के साथ रचनात्मक रूप में दर्शाएँ ।
(Roll No. 21-39)(section-B)
(Roll No. 21-38)(section-A)
- पाठ्यपुस्तक सुरभि: पेज नंबर 20,24,48,65 दिए गए श्लोक भावार्थ के साथ याद करें।

DRAWING

- Make a poster on save water on half chart.
- Make any one craft item with waste materia.
- Make a night scene on half chart and colour it.
